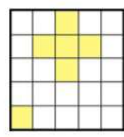
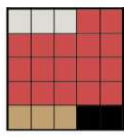





DZIEŃ 6

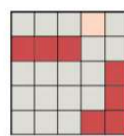
Rozwiąż zadania, a następnie odszukaj na planszy wynik i zamaluj pole według instrukcji.





$$\frac{2}{3} + \frac{4}{9} =$$


$$\frac{6}{8} - \frac{2}{3} =$$


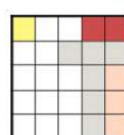
$$\frac{2}{5} + \frac{5}{7} =$$

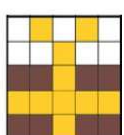



$$\frac{2}{3} - \frac{1}{5} =$$


$$\frac{1}{2} + \frac{3}{4} =$$


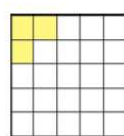
$$\frac{2}{3} + \frac{7}{9} =$$





$$\frac{5}{6} - \frac{2}{3} =$$


$$\frac{3}{4} - \frac{3}{8} =$$


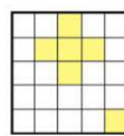
$$\frac{5}{6} + 1\frac{1}{4} =$$

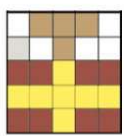


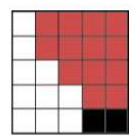
$$3\frac{5}{9} - \frac{1}{6} =$$


$$2\frac{1}{4} + 1\frac{2}{3} =$$


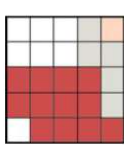
$$2\frac{1}{9} - 1\frac{5}{6} =$$

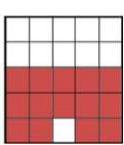


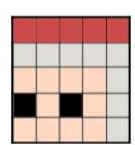
$$4\frac{1}{6} + 2\frac{5}{8} =$$


$$8\frac{3}{4} - 2\frac{1}{3} =$$


$$2\frac{1}{6} - \frac{2}{7} =$$




$$5\frac{2}{15} + 3\frac{7}{10} =$$


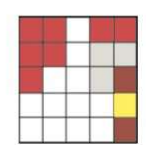
$$4\frac{1}{4} + 5\frac{2}{3} =$$


$$8\frac{31}{36} + 3\frac{9}{24} =$$

$6\frac{19}{24}$	$3\frac{43}{54}$	$3\frac{11}{12}$	$1\frac{4}{9}$	$1\frac{1}{9}$
$\frac{5}{18}$	$\frac{1}{6}$	$12\frac{17}{72}$	$1\frac{1}{4}$	$3\frac{7}{18}$
$2\frac{1}{12}$	$8\frac{5}{6}$	$\frac{7}{15}$	$9\frac{11}{12}$	$1\frac{4}{35}$
$\frac{3}{8}$	$1\frac{37}{42}$	$\frac{1}{12}$	$3\frac{23}{30}$	$6\frac{5}{12}$



$$7\frac{11}{18} - 3\frac{22}{27} =$$



$$6\frac{5}{12} - 2\frac{13}{20} =$$